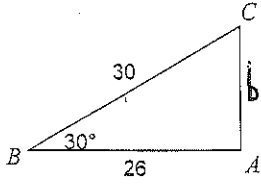
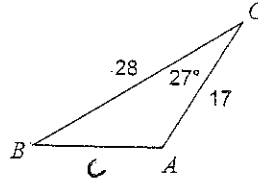


Find each measurement indicated. Round your answers to the nearest tenth.

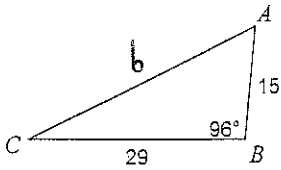
1. Find b



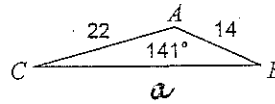
1. Find c



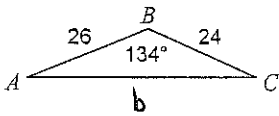
2. Find b



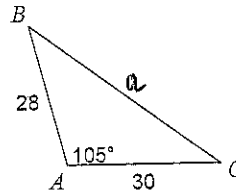
2. Find a



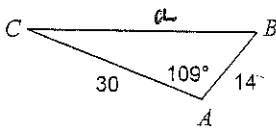
3. Find b



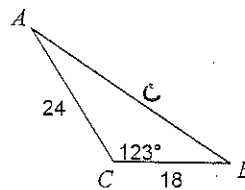
3. Find a



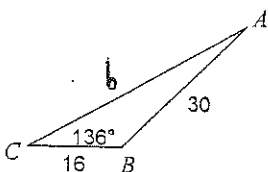
4. Find a



4. Find c



5. Find b



5. Find b

